



SPLENDIDMOMS

SAMPLE ANNUAL QUESTION PAPER

Class: LKG

Subject: Math

Marks: 50 M

Name: _____ Roll No: ____ Sec: ____ Date: _____

I. Write the numbers from 71 to 100..

[10M]

T	0

T	0

T	0

II. Write the number names for the following numbers. [5M]

16 - _____

10 - _____

24 - _____

8 - _____

11 - _____

III.

[4 x 1 = 4M]


a. Circle the taller object




b. Circle the thick object



c. Circle the bigger object



d. Circle more number of objects




IV. Count and write the number

[5 x 1 = 5M]



V. Circle the odd one out

[5 x 1 = 5M]



VI. Circle the bigger number

[3 x 1 = 3M]



VII. Circle the smaller number

[3 x 1 = 3M]



VIII. Write the before numbers

[5 x 1 = 5M]

___ 12

___ 29

___ 40

___ 37

___ 23

IX. Put the correct sign (< , > , =)

. [5 x 1 = 5M]

17 _____ 19

8 _____ 7

20 _____ 12

18 _____ 39

16 _____ 16

X. Match the shape with the object

[5 x 1 = 5M]

