



SPLENDIDMOMS

SAMPLE ANNUAL QUESTION PAPER

Class: UKG

Subject: EVS

Marks: 80 M

Name: _____ Roll No: _____ Sec: _____ Date: _____

I. Write the number names (/6M)

a) 13 _____

b) 20 _____

c) 7 _____

d) 19 _____

e) 11 _____

f) 15 _____

II. Write the numerals. (161- 200)

(/10M)

HTO
161

165

168

170

HTO
171
172

174

178

HTO
181

183

187

190

HTO

192

195

197

199

III. Back-ward numbers (100 – 61)

(/8M)

H T O		
1	0	0

T O		
	9	0

T O		
	8	0

T O		
	7	0


IV. Write >, < or = in the given box.

(/6M)

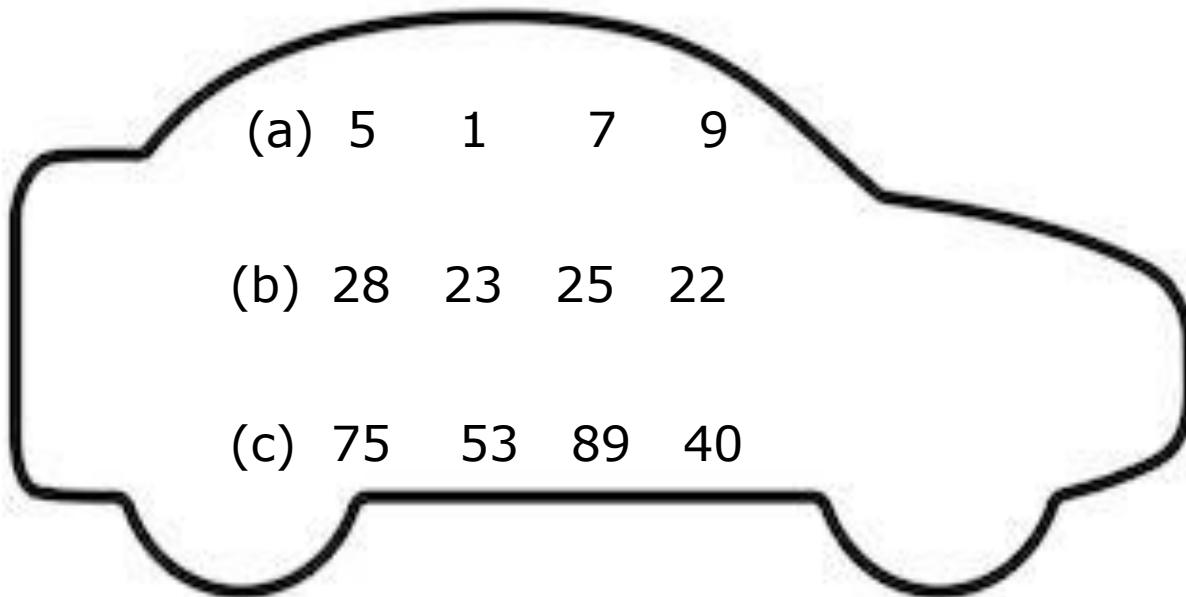
8	___	6
53	___	53
20	___	12

60	___	60
48	___	46
82	___	87

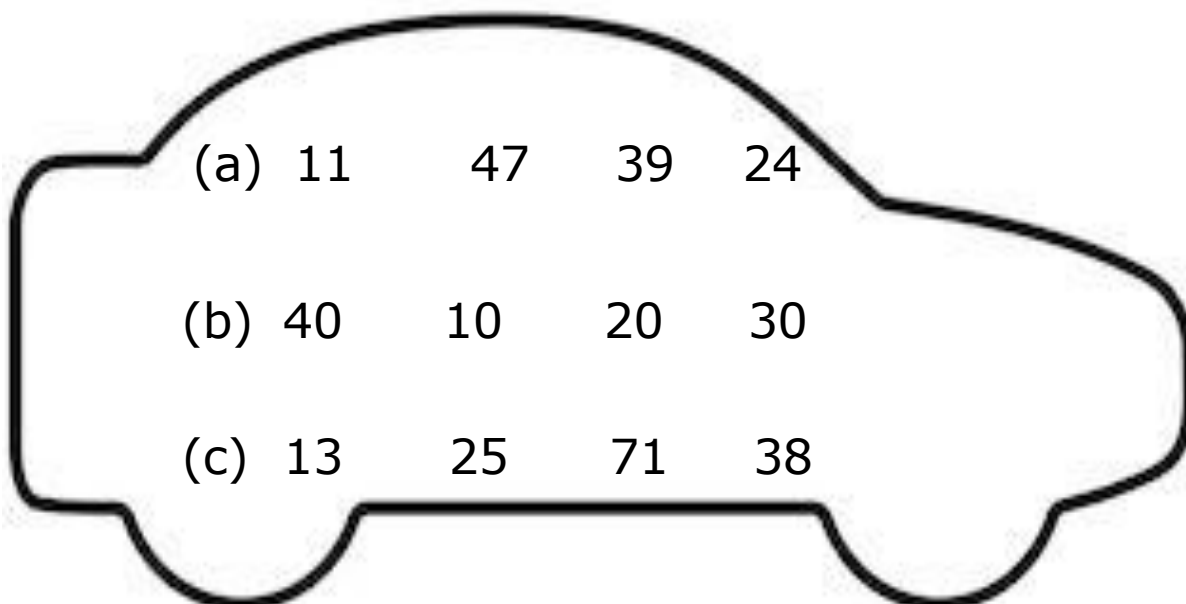
V. What comes after, before and in between (/6M)



VI. Circle the smallest number in each row. (/3M)



VII. Circle the largest number in each row. (/3M)



VIII. Arrange in Ascending order.

(/4M)

a) 16 18 19 17

b) 40 38 39 37 36

IX. Arrange in Descending order.

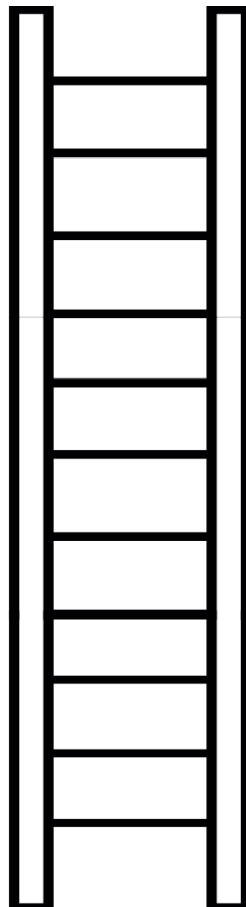

(/4M)

a) 76 72 74 73



































b) 98 96 99 97

X. Skip counting by 5's.

(/5M)



XI. Identify the position of pictures and circle (/5M)

4 th								
8 th								
2 nd								
6 th								
7 th								

ORAL (/20M)

1) Identify the numbers

(5m)

a) 123

c) 108

e) 117

b) 200

d) 155

2) Identify the objects which are more

(5m)



3) Identify the smallest and largest number

(10m)

a) 12 37 56 20

b) 69 45 87 35

c) 33 97 86 54

d) 85 75 55 15