



# SPLENDIDMOMS

## SAMPLE ANNUAL QUESTION PAPER

Class: UKG

Subject: Math

Marks: 80 M

Name: \_\_\_\_\_ Roll No: \_\_\_\_\_ Sec: \_\_\_\_\_ Date: \_\_\_\_\_

I. Write the numbers from 161 to 200..

[10M]

T	0	T	0	T	0	T	0

II. Write the number names for the following numbers.

[5 x 1 = 5M]

25 - \_\_\_\_\_

80 - \_\_\_\_\_

96 - \_\_\_\_\_

100 - \_\_\_\_\_

14 - \_\_\_\_\_


III. Skip counting by 2.

[4 x 1 = 4M]

2 \_\_\_\_\_ 16

IV. Write the numbers in backward counting.

[3 x 2 = 6M]



V. Add the following

[5 x 1 = 5M]

$$\begin{array}{r} 3 \\ + 3 \\ \hline \\ \hline \end{array}$$

$$\begin{array}{r} 5 \\ + 4 \\ \hline \\ \hline \end{array}$$

$$\begin{array}{r} 9 \\ + 1 \\ \hline \\ \hline \end{array}$$

$$\begin{array}{r} 6 \\ + 2 \\ \hline \\ \hline \end{array}$$

$$\begin{array}{r} 7 \\ + 3 \\ \hline \\ \hline \end{array}$$

VI. Subtract the following

[5 x 1 = 5M]

$$\begin{array}{r} 5 \\ - 5 \\ \hline \\ \hline \end{array}$$

$$\begin{array}{r} 9 \\ - 5 \\ \hline \\ \hline \end{array}$$

$$\begin{array}{r} 2 \\ - 1 \\ \hline \\ \hline \end{array}$$

$$\begin{array}{r} 4 \\ - 2 \\ \hline \\ \hline \end{array}$$

$$\begin{array}{r} 7 \\ - 3 \\ \hline \\ \hline \end{array}$$

VII. Put the correct sign (  $<$  ,  $>$  ,  $=$  ) . [6 x 1 = 6M]

9 \_\_\_\_ 99                      11 \_\_\_\_ 11

19 \_\_\_\_ 29                      4 \_\_\_\_ 0

42 \_\_\_\_ 52                      15 \_\_\_\_ 15

VIII. Write the numbers that comes before, after and between [6 x 1 = 6M]

\_\_\_\_ 21                      99 \_\_\_\_                      98 \_\_\_\_ 100

\_\_\_\_ 100                      49 \_\_\_\_                      4 \_\_\_\_ 6

IX. Write the numbers in ascending order. [3 x 1 = 3M]

15, 7, 2, 19, 21 \_\_\_\_\_

8, 17, 4, 13, 2 \_\_\_\_\_

21, 19, 7, 27, 15 \_\_\_\_\_

X. Write the numbers in descending order. [3 x 1 = 3M]

4, 1, 6, 8, 3 \_\_\_\_\_

18, 12, 15, 16, 11 \_\_\_\_\_

10, 8, 19, 3, 5 \_\_\_\_\_

XI. Circle the incorrect number in the sequence [4 x 1 = 4M]

7      8      9      12      11











21    22    33    24    25

95    96    97    98    100

46    47    48    49    60

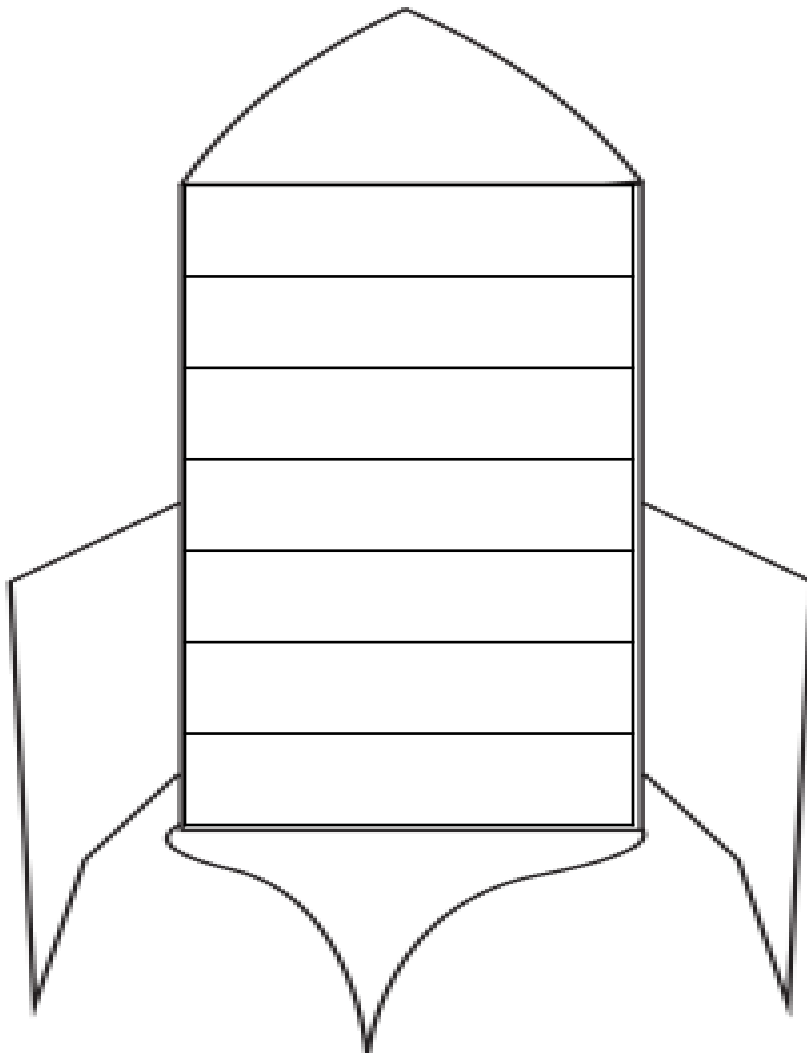
XII. Match the shapes to its correct object

[5 x 1 = 5M]


	▪	▪	
	▪	▪	
	▪	▪	
	▪	▪	
	▪	▪	

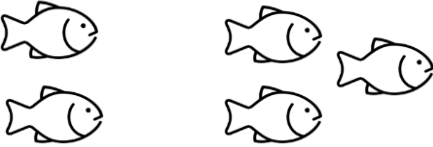
XIII. Write down days of the week


[8M]





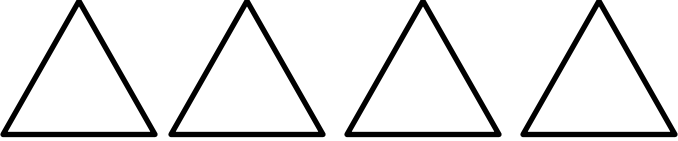

XII. Count the number of objects in each set. Tick (✓) the more objects. [6 x 1 = 6M]

1. 

2. 

3. 

XIII. Color the objects accordingly. [4 x 1 = 4M]

	<p><b>4th</b></p>
	<p><b>2nd</b></p>
	<p><b>1st</b></p>
	<p><b>2nd</b></p>